

**O. P. JINDAL SCHOOL, SAVITRI NAGAR**  
**Half Yearly Examination (2019 – 2020)**

**Class / Section: II \_\_\_\_\_**  
**Subject: General Knowledge**

**MM: 20 Marks**  
**Time: 1Hr**

Name: \_\_\_\_\_

Roll No.: \_\_\_\_\_

Invigilator's Sign: \_\_\_\_\_ Marks Obtained: \_\_\_\_\_ Examiner's Sign: \_\_\_\_\_

**General Instruction: All questions are compulsory.**

**Q1. Tick (√) the correct answer:**

**(1x4=4 Marks)**

i) We celebrate Children's Day on

(a) 26<sup>th</sup> January

(b) 14<sup>th</sup> November

(c) 2<sup>nd</sup> October

ii) Who treat our teeth and gums?

(a) Mason

(b) Watchman

(c) Dentist

iii) It is a tube-like wind instrument with many holes.

(a) Violin

(b) Flute

(c) Guitar

iv) When we suffer from fever, we lose our sense of

(a) Sight

(b) Taste

(c) Smell

**Q2. Match the following:**

**(1x4= 4 Marks)**

(i) Earth Day

:

Ganga River

(ii) Sun Temple

:

Italy

(iii) Longest River

:

22<sup>nd</sup> April

(iv) Pizza

:

Odisha

P.T.O.

**Q3. Fill in the blanks with the options given below :**

**(1x5= 5 Marks)**

**(Narendra Modi, Skin, Architect, 365, Compass)**

- (i) An \_\_\_\_\_ design our buildings.
- (ii) \_\_\_\_\_ is the largest organ in our body.
- (iii) The Prime Minister of India is \_\_\_\_\_.
- (iv) \_\_\_\_\_ is used to show directions.
- (v) There are \_\_\_\_\_ days in a year.


**Q4. Write true or false :**

**(1x5= 5 Marks)**

- (i) August is the 10<sup>th</sup> month of the year. \_\_\_\_\_
- (ii) Cricket is played between two teams of 11 members each. \_\_\_\_\_
- (iii) Dras, Jammu and Kashmir is known to be the coldest place in India. \_\_\_\_\_
- (iv) The largest pizza was made in India. \_\_\_\_\_
- (v) The Taj Mahal is one of the famous 'Seven Wonders of the world'. \_\_\_\_\_


**Q5. Identify and write their name with the options given below: (1/2x4=2Marks)**

**(Red Fort, Hawa Mahal, Qutub Minar, Taj Mahal)**




(i)

\_\_\_\_\_




(ii)

\_\_\_\_\_



(iii)

\_\_\_\_\_



(iv)

\_\_\_\_\_