

O. P. JINDAL SCHOOL, SAVITRI NAGAR
Annual Examination (2022 – 2023)

Class: I

Subject: Information Technology (IT)

MM: 40

Time: 1 Hr.

Name: _____

Class/Section: _____

Roll No.: _____

Invigilator's sign: _____

Marks Obtained: _____

Examiner's sign: _____

General Instructions: All questions are compulsory.

SECTION – A

Q.1 Tick out the correct option:

(04 x 01 = 04 Marks)

- i. Which tools is used to draw a straight line?
a. Line Tool b. Brush Tool c. Pencil Tool d. none of these
- ii. Which tool is used to draw a circle?
a. Line Tool b. Rectangle Tool c. Oval Tool d. none of these
- iii. Letters, words and numbers in computer is called _____.
a. Memory b. Data c. Storage Device d. none of these
- iv. Computer store its data in _____.
a. Memory b. Refrigerator c. School Bag d. none of these

SECTION – B

Q.2 Fill in the blanks:

(04 x 01 = 04 Marks)

[Hints: Data, Storage, Paint, Almirah]

- i. You can store your clothes, books and toys in _____.
- ii. _____ can be numbers, words, pictures or sound.
- iii. _____ program is used to make drawings on a computer.
- iv. A School bag is a _____ place for keeping books.

SECTION – C

Q.3 Write True(T) or False(F):

(04 x 01 = 04 Marks)


- i. Eraser tool is used to paint the picture. _____
- ii. A Pen Drive is a Storage device. _____
- iii. A computer works on its own. _____
- iv. Paint program is used to make drawings on a computer. _____

SECTION – D


Q.4 Match the column-

(04 x 01 = 04 Marks)


i) Almirah




ii) Refrigerator



iii) School Bag



iv) Computer



SECTION – E

Q5. Rearrange the jumbled letters:


(02 x 01 = 02 Marks)


i. T N I A P - _____

ii. V L O A - _____

Q6. Name the following tools used in Paint.

(02 x 01 = 02 Marks)

i.  _____.

ii.  _____.
