

O. P. JINDAL SCHOOL, SAVITRI NAGAR**Annual Examination - (2022 – 2023)****Class / Section: II()****MM: 40****Subject: Environmental Studies****Time: 2Hr.15Min.**

Name: _____

Roll No.: _____

Invigilator Sign: _____ Marks Obtained: _____

Examiner Sign: _____

Fifteen Minutes Extra will be given for reading the Question Paper.**General Instructions: All questions are compulsory.****Q1. Tick (✓) the correct option:****(5 Marks)**

i) The quickest means of communication is

a) Letter

b) Postcard

c) Phone

ii) Three-fourths of the Earth is covered with

a) Air

b) Water

c) Land

iii) This is an aquatic plant

a) Mango

b) Lily

c) Cactus

iv) These animals have feathers

a) Birds

b) Insects

c) Amphibians

v) The Moon reflects the light of the

a) Satellite

b) Earth

c) Sun

Q2. Fill in the blanks:**(5 Marks)**

plants	Rivers	phone	Communication	paper
--------	--------	-------	---------------	-------

i) _____ are a large amount of flowing water.

ii) Herbivores eat only _____.

iii) We get _____ from the bamboo tree.

iv) _____ means to send or receive messages.

v) We can send an e-mail through a _____.

Q3. Write True or False:**(5 Marks)**

- i) Computers are not common these days _____.
- ii) Use a handkerchief while sneezing _____.
- iii) Ginger is a root _____.
- iv) There is air all around the Earth _____.
- v) Honeybee causes malaria _____.

Q4. Match the following:**(5 Marks)**

- | | |
|-------------------|--------------------|
| i) Post office | a) Joey |
| ii) Pleasant wind | b) Wings |
| iii) The root | c) Letters |
| iv) Bird | d) Breeze |
| v) Kangaroo | e) Holds the plant |

Q5. Write the correct names:**(2 Marks)**

- i) I grunt- _____.
- ii) Flat lands are called- _____.

Q6. Give one example of edible:**(2 Marks)**

- i) Stem- _____.
- ii) Leaf- _____.

Q7. Give one word answer:**(2 Marks)**

- i) Moving air is called- _____.
- ii) They need support to climb- _____.

Q8. Answer the following questions:

(6 Marks)

i) How do birds fly?

Ans.

ii) What are dry leaves used for?

Ans.

iii) What type of air should we breathe in?



Ans.

Q9. Draw these shapes of the Moon:

(2 Marks)

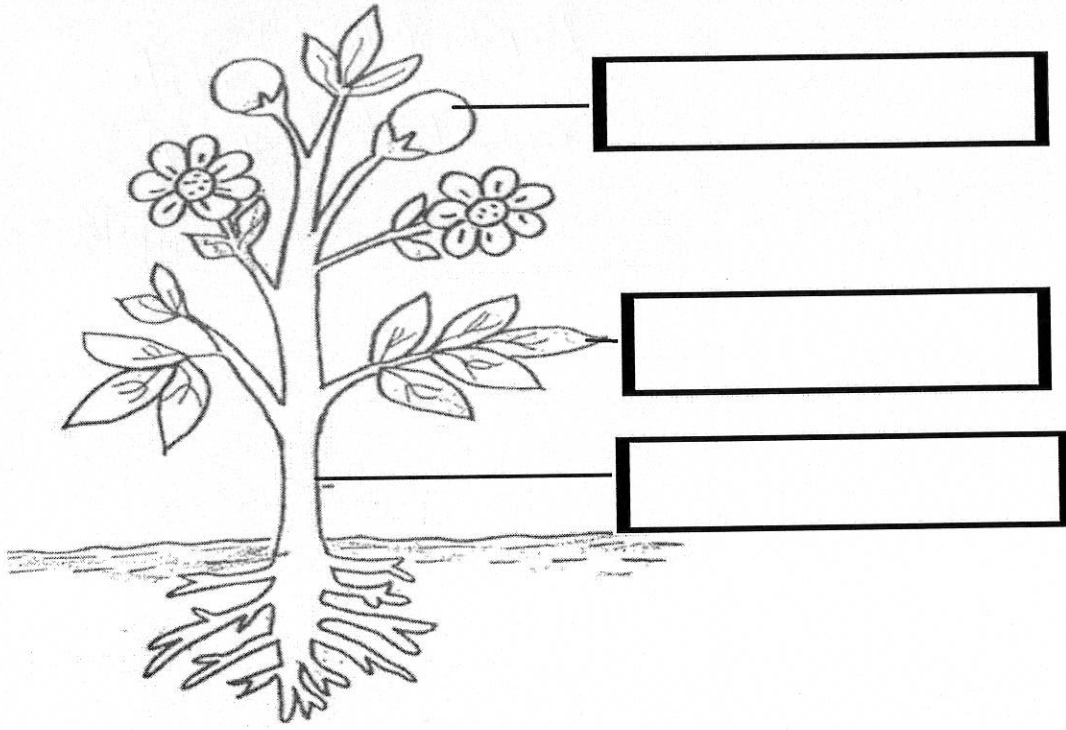
i) Half Moon

ii) Crescent Moon



Q10. Colour and label the parts of the plant:

(3 Marks)



Q11. Encircle the farm animals:

(3Marks)

