

O. P. JINDAL SCHOOL, SAVITRI NAGAR
Annual Examination - (2022 – 2023)

Class / Section: III ()
Subject: General Knowledge

MM: 40
Time: 1 Hr.

Name: _____

Roll No.: _____

Invigilator Sign: _____

Marks Obtained: _____

Examiner Sign: _____

General Instructions: All questions are compulsory.

Q.I Tick (✓) the correct answer:

(1x10 = 10 Marks)

1. Which one of the following is the fastest wild cat ?
 a) Jaguar b) Cheetah c) Tiger d) Leopard
2. Which planet lies between Earth and Jupiter ?
 a) Mars b) Venus c) Saturn d) Mars
3. What sounds does a river make ?
 a) Pattering b) Howling c) Gurgling d) Hissing
4. Who visited Lilliput and Brobdingnag ?
 a) Captain Hook b) Sindbad c) Gulliver d) Peter Pan
5. In which dance form is the dancer wearing a drum- like skirt?
 a) Manipuri b) Kuchipudi c) Odissi d) Kathak
6. What is the currency of India ?
 a) Taka b) Rupee c) Yen d) Dollar
7. Who has ten heads ?
 a) Ravana b) Meghnath c) Vibhishana d) Kumbhakaran
8. In the Jungle Book , who among these is Mowgli's enemy ?
 a) Baloo b) Bagheera c) Shere Khan d) Nagini
9. Which diet has all the nutrients in the right amount ?
 a) Grand diet b) Powerful diet c) Balanced diet d) Deficit diet
10. What is the national sport of Bangladesh ?
 a) Badminton b) Rugby c) Sumo d) Kabaddi

Q. II Write True or False:

(1x8 = 8Marks)

1. Cotton is one type of plant fibre . _____
2. Sparrow is the smallest bird . _____
3. Jupiter is the largest planet in the solar system . _____
4. King Dasaratha had three sons . _____
5. Yuan is the currency of Japan _____
6. Proteins gives the body most of the energy it needs . _____
7. Golden Temple is in Amritsar . _____
8. Tulsi is a medicinal plant . _____

Q. III Match the column:

(1x8 = 8 Marks)

Column A

Column B

- | | |
|------------------------|-------------------|
| 1. Tallest land animal | a) Kolkata |
| 2. Sun Temple | b) Srilanka |
| 3. Badminton | c) Giraffe |
| 4. Saturn | d) Indonesia |
| 5. USA | e) Taka |
| 6. Victoria Memorial | f) Konark |
| 7. Volley Ball | g) Extensive Ring |
| 8. Bangladesh | h) Dollar |

Q.IV Fill in the blank with correct answer:

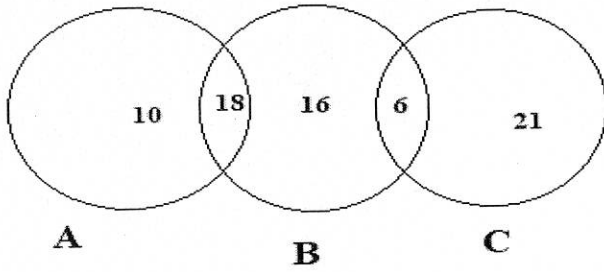
(1x8 = 8 Marks)

Calories, Hissing , Janmashtami , Ticking, Neptune , Ayodhya , NewDelhi , Kathak

1. King Dasaratha was the ruler of _____.
2. _____ is the sound of clock .
3. _____ celebrates the birth of Krishna .
4. Lotus Temple is situated in _____ .
5. _____ is the farthest planet from the sun .
6. _____ is the dance form in which dancer is wearing a churidar – kurta .
7. _____ is the sound of the steam.
8. The amount of energy in a food item is measured in _____ .

Q. V Look at the picture and answer the following questions:

(1x2 = 2 Marks)



1. Which number is common to circle B and C? _____
2. What is the sum of the number common to B and C and the number exclusive to A? _____

Q. VI Identify the pictures and write their names:


(1x4 = 4 Marks)

Ludo , Flag of Sri Lanka, Eating Place , Indira Gandhi

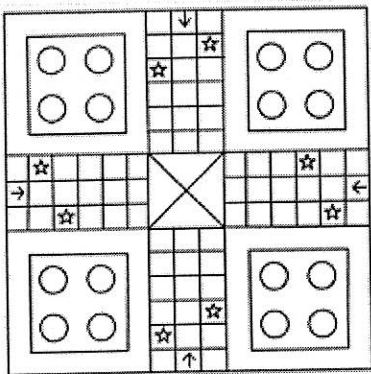
1.



2.



3.



4.

