

**O. P. JINDAL SCHOOL, SAVITRI NAGAR**  
**Annual Examination (2023 – 2024)**

**Class: II**

**Subject: Artificial Intelligence (AI)**

**MM: 20**

**Time: 1 Hr.**

Name: \_\_\_\_\_

Class/Section: \_\_\_\_\_

Roll No.: \_\_\_\_\_

Invigilator's sign: \_\_\_\_\_

Marks Obtained: \_\_\_\_\_







Examiner's sign: \_\_\_\_\_

General Instructions: All questions are compulsory.

**SECTION – A**

**Q.1 Tick out the correct option:**

**(04 x 01 = 04 Marks)**

- i. \_\_\_\_\_ is not a portable device.  
a. Desktop                      b. Laptop                      c. Tablet                      d. none of these
- ii. It shows the work that you do on a computer.  
a.                       b.                       c.                       d. none of these
- iii. Identify the picture of a joystick.  
a.                       b.                       c.                       d. none of these
- iv. Which part of a computer processes the input?  
a. Monitor                      b. CPU                      c. Mouse                      d. none of these

**SECTION – B**

**Q.2 Write True (T) or False (F):**

**(04 x 01 = 04 Marks)**

- i. You can play games on a computer. \_\_\_\_\_
- ii. A tablet is bigger in size than a laptop. \_\_\_\_\_
- iii. A monitor is an input device. \_\_\_\_\_
- iv. A keyboard is used for entering data. \_\_\_\_\_

**SECTION – C**

**Q.3 Fill in the blanks:**

[Hint : Printer, Input, Script, Keyboard ]


(04 x 01 = 04 Marks)

- a. A \_\_\_\_\_ is a set of blocks that allow a sprite to carry out specific tasks.
- b. A \_\_\_\_\_ has many keys on it.
- c. A \_\_\_\_\_ is used to take printouts.
- d. A scanner is an \_\_\_\_\_ device.

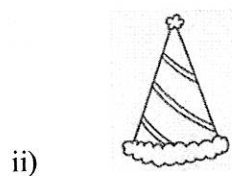
**SECTION – D**

**Q.4 Match the column:**


(04 x 01 = 04 Marks)



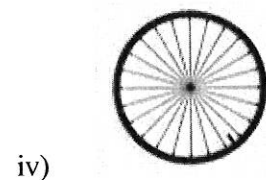
(a) Web Camera



(b) Circle Shape



(c) Scanner



(d) Triangle Shape

**SECTION – E**

**Q5. Complete the missing letters to form words.**

**(02 x 01 = 02 Marks)**

1. H \_\_\_\_ R \_\_\_\_ D \_\_\_\_ S \_\_\_\_.

2. J \_\_\_\_ Y \_\_\_\_ I \_\_\_\_ K.

**Q6. Answer the following questions.**

**(02 x 01 = 02 Marks)**

1. Name the coding platform where you can create a code.

---

2. Write the name of any one shape that you see in the Shapes group in Paint.

---