

**O. P. JINDAL SCHOOL, SAVITRI NAGAR**  
**Annual Examination - (2022 – 2023)**  
**Sample Paper**

**Class / Section: I( )****MM: 40****Subject: Environmental Studies****Time: 2Hr.15Min.**

Name: \_\_\_\_\_

Roll No.: \_\_\_\_\_

Invigilator Sign: \_\_\_\_\_ Marks Obtained: \_\_\_\_\_

Examiner Sign: \_\_\_\_\_

**Fifteen Minutes Extra will be given for reading the Question Paper.****General Instructions: All questions are compulsory.****Q1. Tick ( / ) the correct option:****(5 Marks)**

i) The weather is very cold on a

a) Sunny Day

b) Rainy Day

c) Snowy Day

ii) This is a flightless bird

a) Hen

b) Emu

c) Crow

iii) Watermelon is a

a) Climber

b) Tree

c) Creeper

iv) The Moon moves around the \_\_\_\_\_

a) Earth

b) Sun

c) Plants

v) The shape of the Earth is like an

a) Orange

b) Apple

c) Mango

**Q2. Fill in the blanks:****(5 Marks)**

Stars	mountains	dog	Sun	Herbs
-------	-----------	-----	-----	-------

i) Very high hills are called \_\_\_\_\_.

ii) \_\_\_\_\_ live for few months only.

iii) The \_\_\_\_\_ is very popular as a pet.

iv) \_\_\_\_\_ can be seen in groups.

v) The \_\_\_\_\_ shines brightly on a sunny day.

**Q3. Write True or False:**

**(5 Marks)**

- i) During winters the weather is hot \_\_\_\_\_.
- ii) Penguin is a flightless bird \_\_\_\_\_.
- iii) Pumpkin is a climber \_\_\_\_\_.
- iv) In the morning, we cannot see the stars \_\_\_\_\_.
- v) Ocean is a very small water body \_\_\_\_\_.

**Q4. Match the following:**

**(5 Marks)**

- |                      |             |
|----------------------|-------------|
| i) Desert            | a) Sheep    |
| ii) Sun              | b) Raincoat |
| iii) Domestic animal | c) Sand     |
| iv) Tree             | d) Heat     |
| v) Rainy Day         | e) Neem     |

**Q5. Unjumble the letters to make new words:**

**(3 Marks)**

- i) NILO- \_\_\_\_\_.
- ii) PIALN- \_\_\_\_\_.
- iii) IRBD- \_\_\_\_\_.

**Q6. Give one word answer:**

**(2 Marks)**

- i) Land covered with trees- \_\_\_\_\_.
- ii) A band of seven colours- \_\_\_\_\_.

**Q7. Answer the following questions:**

**(6 Marks)**

i) What is the shape of the Earth?

Ans. \_\_\_\_\_  
\_\_\_\_\_

ii) What type of stem do shrubs have?

Ans. \_\_\_\_\_  
\_\_\_\_\_

iii) How many legs do insects have?



Ans. \_\_\_\_\_  
\_\_\_\_\_

**Q8. Draw these shapes of the Moon:**

**(2 Marks)**

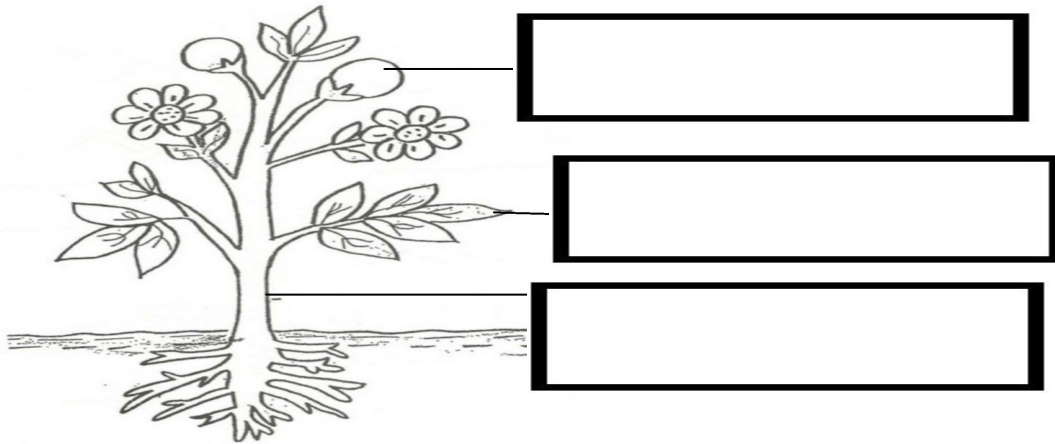
**i) Half Moon**

**ii) Crescent Moon**



**Q9. Colour and label the parts of the plant:**

**(3 Marks)**



**Q10. Draw and colour:**


**(2 Marks)**

**The Day Sky-**



**Q11. Draw and colour any one thing used on a Rainy Day:**

**(2 Marks)**



\*\*\*\*\*